

UGANDA MARTYRS PRIMARY SCHOOL - KATWE (UMAKA)

PRIMARY SIX END OF TERM III EXAMS -2022

SOCIAL STUDIES

SECTION A (40 MARKS)

1. Identify the direction of Kenya from Uganda.

2. Give one member of an extended family.

3. Who is the highest civil servant in a district.

4. What is environmental degradation?

5. Mention one play object at home.

6. What is the use of latitudes and longitudes on map?

7. Give one type of coffee grown in Uganda.

8. How do Ugandans respect the national anthem?

9. Which animal was used for protection by early man?

10. Write E.A.LA in full.

11. Why is the government of Uganda creating more districts?

12. State the importance of zebra crossing on roads.

13. How was Joseph Thompson be able to see Mt Elgon in Kenya?

14. How does man care for his clothes as a resource?

15. Give one characteristic of depression lakes.

16. What do we call the act of violating children's rights?

17. Identify the type of electricity generated from rivers.


18. Mention one living component of the environment.

19. How did Ik Musazi contribute towards Uganda's independence.

20. How is the town of Arusha in Tanzania politically important towards the East African community?

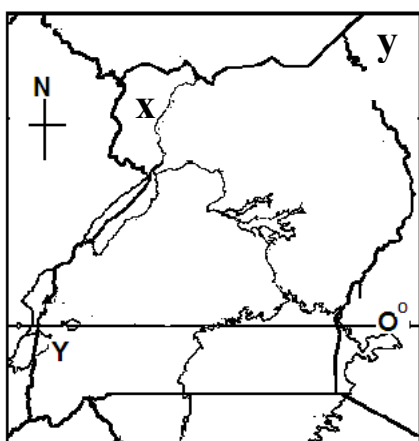
21. Which cultural practice is practised in your community?

22. Name the political party that led Kenya to independence.
23. Which is the ethnic group entered Uganda using North-Eastern direction?
24. Why is the government of Uganda developing roads in rural areas?
25. Identify the type of rainfall received around Mt Rwenzori
26. Name the highest peak of Mt. Kilimanjaro.
27. In the space below draw a symbol of a rift valley.



28. It is 4:00pm at Greenwich mean time, What time will it be in kenya which is 90° East.
29. How are polythene bags dangerous to the environment?
30. Name one group of people who are not allowed to vote during national elections.
32. What title given to persons who heads judiciary?
33. Which body in Uganda is responsible for organizing elections?
34. State one reason why the government collects taxes?
35. What was the major cause of mau mau rebellion in Kenya?
36. A part from bush fire, give one problem facing game parks.
37. Name one in land port on lake Victoria.

Use the map below for question 38 and 39.



38. Why was area marked x transferred to Uganda
39. What name was given to region marked y during colonial period
40. Why do Uganda and Kenya use English as their official language

SECTION B (60 marks)

- 41 (a) Mention two rebellion staged against colonial rule in East Africa
 - (i)
 - (ii)

(b) Write two effects of the above rebellions

(i) _____

(ii) _____

42. (a) Define wild life _____

(b) Identify one type of tourists.

(c) State one problem facing wild life.

(d) Give one tourist attraction features in East Africa.

43. (a) What is meant by population census?

(b) Why does a government conduct a census?

(c) Write two information collected during population census?

(i) _____

(ii) _____

44. Who signed Buganda agreement on the behalf on

(i) Buganda kingdom _____

(ii) British government _____

(b) Give one result of the above government

(c) Why did kabaka Daudi Chwa not sign the Buganda agreement

45. Complete the table below

	Crop	Product
i	Pyrethrum	_____
ii	_____	Cooking oil
iii	cotton	_____
iv	_____	mats

46. Name the method of the farming where crops are supplied with water by man to support growth.

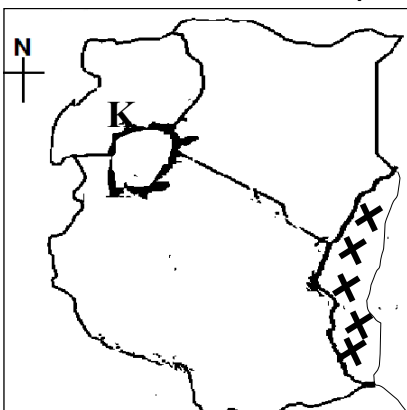
(b) State one area in East Africa where the above mentioned system of farming is commonly used

(c) Give two disadvantages of the above farming system mentioned in 'a' above.

(i) _____

(ii) _____

47. Use the map to answer below questions.



(a) What type of natural vegetation in marked x.

(b) Name the natural forest k ton the map.

(c) Give the importance of vegetation to people.

48. (a) What is fishing? _____

(b) Give two importances of carrying out fishing in East Africa.
(i) _____ (ii) _____
(c) Give one method of preserving fish. _____
49. (a) What are rift valley lakes? _____

(b) Name one rift valley lake in Kenya. _____

(c) Give one characteristic of rift valley lakes. _____

(d) Give the importance of rift valley lakes.
(i) _____
(ii) _____
50. (a) Which organization sent most missionaries in Uganda. _____

(b) Write one problem faced by early missionaries in East Africa. _____

(c) State two positive contributions of missionaries.
(i) _____
(ii) _____
51. (a) Define communication. _____

(b) Give one use of a radio at school. _____

(c) Identify two modern means of communication.
(i) _____ (ii) _____
52. (a) Name two Nationalists who led their countries to independence.
(i) Tanzania _____
(ii) Kenya _____
(b) Write the political parties that led the following countries to independence.
(i) Uganda _____
(ii) Tanzania _____
53. (a) What is mining? _____

(b) Which mineral is mined at Mwadui in Tanzania? _____

(c) State one method of mining. _____

(d) Give one importance of mining. _____

54. (a) What is transport? _____

(b) Which type of transport is suitable for transporting bulky goods? _____

(c) (i) Write **UNRA** in full. _____

(ii) Name the type of road affected by rainy weather. _____

55. (a) What was the colonial master of Kenya? _____

(b) Name two agreements signed to put East Africa under colonial rule.
(i) _____
(ii) _____
(c) Name one person in East Africa who was used to extend British rule. _____
